

Homework – WC 10th May 2021

Year 3 and 4 Correct the Spelling Mistake (2)

The spelling mistakes in these sentences have been circled. Write the correct spelling for each circled word in the box.

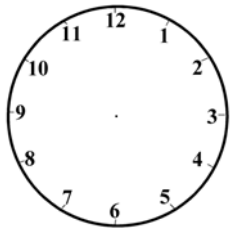
1. Put a full stop at the end of a centents.
2. Jim managed to complet the game.
3. My favrit pie is apple and raspberry.
4. My gran is a very speshu person.
5. Perrhapps there was no one in when I knocked at the door.
6. The match will continyou in an hour.
7. Pete said he has had enuff now.
8. I got the anzer right!

Each sentence below has one word that is incorrect. Write the correct spelling of the word in the box.

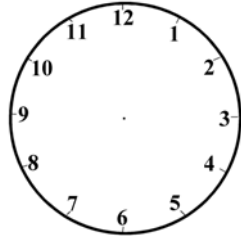
1. The dog had been very norty.
2. In a minit, the film will start.
3. The dentist asked me a queshtun while he looked at my teeth.
4. The wimin were sitting at the bus stop chatting.
5. I was out of bref after running up that hill.
6. The nurse delivered an inporttent message.
7. The fairy godmother made the golden coach disapier in a puff of smoke.
8. I don't supoze there are any more cakes left?

Name : _____

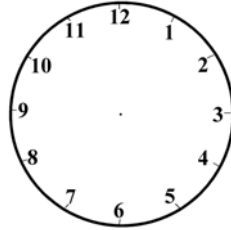
1. Draw the hands


 :

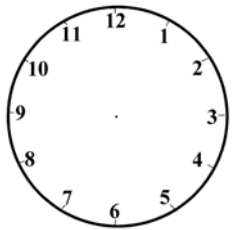
Twenty to 5


 :

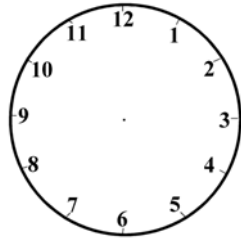
Ten minutes to 10


 :

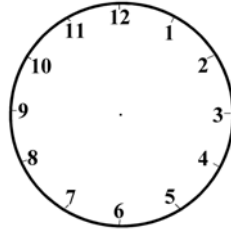
Five minutes to 12


 :

Ten minutes to 3


 :

Twenty five to 7


 :

Five minutes to 9

2. Leon makes an array using counters. Part of the array is covered.



Write down a multiplication that the array shows.

$$\square \times \square$$

How many counters are in the array?

_____ counters

- 3.

A bag costs £11 and a mug costs £7
 Annie spends £80 in total on bags and mugs.
 She buys 6 bags.
 How many mugs does she buy?

_____ mugs