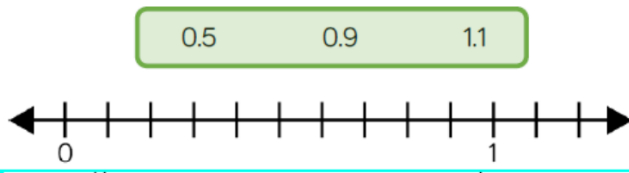


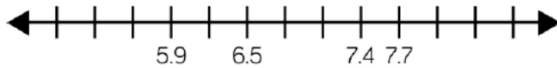
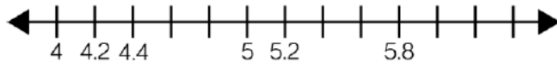
Year 4 Homework: 7th June 2021 Maths

1. Place the decimals on the number line.

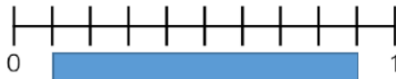


Complete the number lines.

2.



How long is the ribbon?




The ribbon is ___ metres long.

3.

Jack has used a Gattegno chart to divide a 2-digit number by 10. He has placed counters over the numbers in his answer.

100	200	300	400	500	600	700	800	900
10	20	30	40	50	60	70	80	90
1	2	3	4	5	6	7	8	9
0.1	0.2	0.3	0.4	0.5	0.6	0.7	0.8	0.9
0.01	0.02	0.03	0.04	0.05	0.06	0.07	0.08	0.09

What was Jack's original number?
How can you use the chart to help you?



Year 4 Homework: English

Play multi-clause sentence bingo using this picture to inspire you. Write at least 5-6 sentences using the conjunctions in the grid.

if	although	while
because	as	before
since	when	after



Handwriting practice lines for writing sentences.